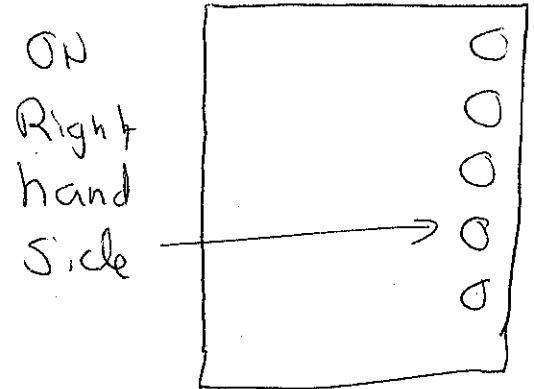
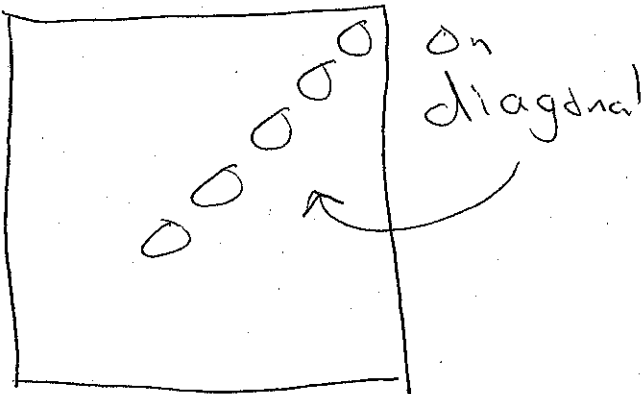
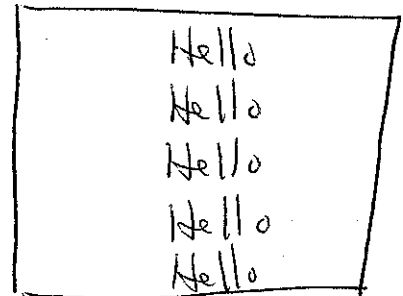
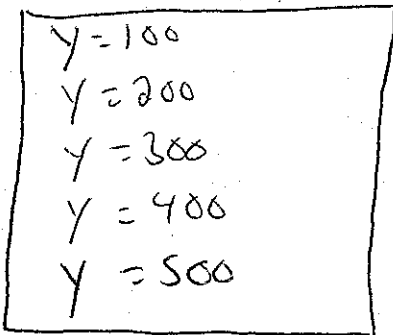


# Loop Quiz

- 1) (two points) Make me a for loop that counts 1,3,5,7,9,11.  
(one point) Make me a for loop that counts 1,2,3,4,5.
- 2) (two points) Make me a while loop that counts 4,3,2,1,0,-1,-2.  
(one point) Make me a while loop that counts 7,6,5,4,3,2.
- 3) (two points) Make me a loop that counts 10.0, 5.0, 2.5, 1.25, 0.625, 0.3125, 0.15625  
(one point) Make me a loop that counts 10.1,10.2,10.3,10.4,10.5,10.6,10.7.
- 4) Draw the left picture for two points, or the right picture for one point. USE A LOOP!



- 5) Draw the left picture for two points, or the right picture for one point. USE A LOOP!



- 7) Draw the left picture for two points, or the right picture for one point. USE A LOOP!

